

Ramakrishna Vivekananda Mission

Session - 2020 - 2021

Class - KG-I

Sub: Bengali (2nd Language)

Work-sheet

১) স্বরবর্ন লেখা : (অ থেকে উ পর্যন্ত)

২) ব্যঞ্জনবর্ন লেখা : (ক - ন) পর্যন্ত ।

୩) ଅନୁସୂଚୀତ ପୂରଣ କର : (ସ୍ଵରବର୍ଣ୍ଣ ଓ ବ୍ୟଞ୍ଜନବର୍ଣ୍ଣ ଦ୍ଵାରା)

i) ଡା _____ କ୍ଷ

iv) ଗ _____ ଙ

ii) ଡ଼େ _____ ଣ

v) ଡ ଥ _____

iii) ଡ୍ଵେ ଓ _____

vi) ଡ୍ଵୁ _____ କ୍ଷ

୪) ସାଂଳା ଆଂଶ୍ରା ଲେଖ : (୧ ଥର ୧୦ ପର୍ଯ୍ୟନ୍ତ)

୫) ସାମ୍ରା ଚିହ୍ନ - ଲେଖ :

କ୍ଷ - ବନ୍ଧ _____

କ୍ଷ୍ମ - ବନ୍ଧ _____

କ୍ଷ୍ଟ - ବନ୍ଧ _____

କ୍ଷ୍ଠ - ବନ୍ଧ _____

୬) ଆଜିଭିଲେ ଲେଖ :-

i) କ୍ଷ, କ୍ଷ୍ମ, କ୍ଷ୍ଟ, କ୍ଷ୍ଠ - _____

ii) କ୍ଷ୍ଟ, କ୍ଷ୍ମ, କ୍ଷ, କ୍ଷ୍ଠ - _____

Ramakrishna Vivekananda Mission

Session:- 2020-21

Subject:- 'English'

Class:- KG-I 'Worksheet'

(Only for practice own your home)

1. write the answer:- (SOLVED)

1. what comes after A?

Ans B.

2. what comes before F?

Ans E.

3. what comes between G & I?

Ans H.

4. what comes before K?

Ans J.

5. what comes after C?

Ans D.

2. Fill in the blanks with alphabet:-

Ki t e.

Ap p le.

L e af.


To k er.

Gl o be.

3. Choose (tick) the correct picture:-

(SOLVED)

E for




K for



G for



L for



A for



4. Tick the correct answer:- (SOLVED)

BDG DOG KPT

LDRG QPTS FISH

DLC EGG JFE

HBK LGJ JUG

DUA POA ANT

————— x —————

RAMAKRISHNA VIVEKANANDA MISSION

SESSION - 2020 - 2021

CLASS - KG - I

Subject - HINDI Worksheet
(Part - 1)

1) खाली जगह भरें :-

a) आ _____ , c) _____ आ

b) _____ ऋ , d) अं _____

2) अ से अः तक लिखी :-

3) सजाकर लिखी :-

a) इ, ई, आ, अ, उ

b) ऋ, ॠ, ई, अं, ऊ

Ramakrishna Vivekananda Mission

Session:- 2020-21

Subject:- Numbers

Class:- KG-1

"Worksheet"

(Only for Practice own your home)

1. Tick the correct answer:- (SOLVED)

3 =

$\begin{array}{cccc} \triangle & \triangle & \triangle & \triangle \\ & \triangle & \triangle & \triangle \\ & & \triangle & \triangle \end{array} = \square$

$\begin{array}{ccc} \triangle & \triangle & \triangle \\ & \triangle & \end{array} = \square$

$\begin{array}{cc} \triangle & \triangle \\ & \triangle \end{array} = \square$

12 =

$\begin{array}{cccccc} \circ & \circ & \circ & \circ & \circ & \circ \\ & \circ & \circ & \circ & \circ & \circ \\ & & \circ & \circ & & \end{array} = \square$

$\begin{array}{ccccccccc} \circ & \circ & \circ & \circ & \circ & \circ & \circ & \circ & \circ \\ & \circ & \circ & \circ & \circ & \circ & \circ & \circ & \circ \\ & & \circ & \circ & & & & & \end{array} = \square$

$\begin{array}{ccccccccc} \circ & \circ & \circ & \circ & \circ & \circ & \circ & \circ & \circ \\ & \circ & \circ & \circ & \circ & \circ & \circ & \circ & \circ \\ & & \circ & \circ & \circ & \circ & & & \end{array} = \square$

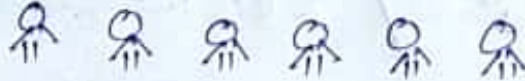
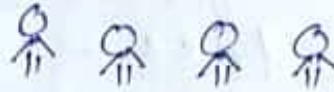
8 =

$\star \star \star \star \star = \square$

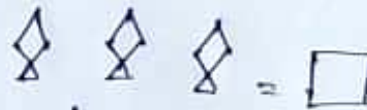
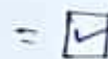
$\begin{array}{cccc} \star & \star & \star & \star \\ & \star & \star & \star \end{array} = \square$

$\begin{array}{cccccccc} & & \star & & & & & \\ \star & \star & \star & \star & \star & \star & \star & \star \\ & \star & \star & \star & \star & \star & \star & \star \end{array} = \square$

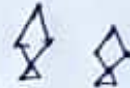
P.T.O



15 =



4 =



2. Write in words:-

(SOLVED)

10 = Ten

3 = Three

17 = Seventeen

9 = Nine

15 = Fifteen

③ what comes after 21?
22

what comes before 13?
12

what comes between 9 and 11?
10

what comes before 26?
25

what comes after 10?
11

4. Write the tables:-

(SOLVED)

$$2 \times 4 = \underline{8}$$

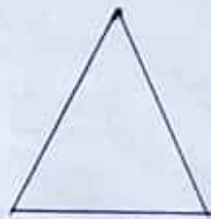
$$3 \times 3 = \underline{9}$$

$$2 \times 9 = \underline{18}$$

$$3 \times 6 = \underline{18}$$

$$2 \times 10 = \underline{20}$$

5. Tick the correct answer:-




=

= BALL

= TRIANGLE

= LADDER



=

= SUN

= MOON

= SQUARE